

Name _____


Solving Two Step Equations Practice 1




$$2x + 1 = 23$$



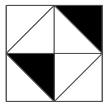
$$4x - 3 = 17$$



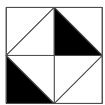
$$6x + 3 = 15$$



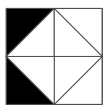
$$3x + 30 = 0$$



$$8x - 8 = -40$$



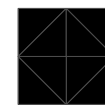
$$-x + 1 = -7$$



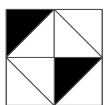
$$-2x + 2 = 4$$




$$-4x + 6 = -30$$



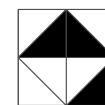
$$3x - 5 = -11$$




$$2x + 8 = -16$$



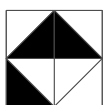
$$8x - 18 = 30$$



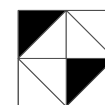
$$-x + 20 = 31$$



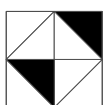
$$-3x + 40 = 10$$



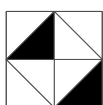
$$-x - 6 = 3$$



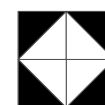
$$6x + 30 = -6$$



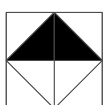
$$-x - 8 = 0$$



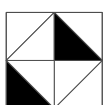
$$3x - 26 = 10$$



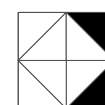
$$-x + 1 = 1$$



$$-9x - 35 = 10$$



$$4x - 8 = 8$$

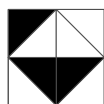


$$-x + 1 = 0$$

-12	-11	-10	-9	-8
-7	-6	-5	-4	-3
-2	-1	0	1	2
3	4	5	6	7
8	9	10	11	12

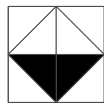
Name _____ Key _____

Solving Two Step Equations Practice 1



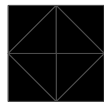
$$2x + 1 = 23$$

$$x = 11$$




$$4x - 3 = 17$$

$$x = 5$$



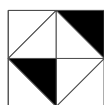
$$6x + 3 = 15$$

$$x = 2$$



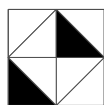
$$3x + 30 = 0$$

$$x = -10$$



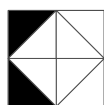

$$8x - 8 = -40$$

$$x = -4$$



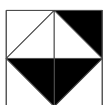
$$-x + 1 = -7$$

$$x = 8$$



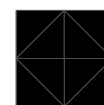
$$-2x + 2 = 4$$

$$x = -1$$



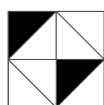
$$-4x + 6 = -30$$

$$x = 9$$



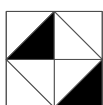
$$3x - 5 = -11$$

$$x = -2$$



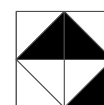
$$2x + 8 = -16$$

$$x = -12$$




$$8x - 18 = 30$$

$$x = 6$$



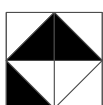
$$-x + 20 = 31$$

$$x = -11$$



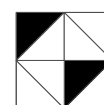
$$-3x + 40 = 10$$

$$x = 10$$



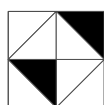
$$-x - 6 = 3$$

$$x = -9$$



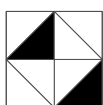
$$6x + 30 = -6$$

$$x = -6$$



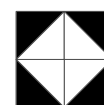
$$-x - 8 = 0$$

$$x = -8$$



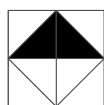
$$3x - 26 = 10$$

$$x = 12$$



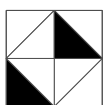
$$-x + 1 = 1$$

$$x = 0$$



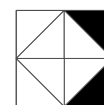
$$-9x - 35 = 10$$

$$x = -5$$



$$4x - 8 = 8$$

$$x = 4$$



$$-x + 1 = 0$$

$$x = 1$$